
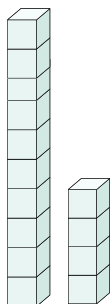


Name _____

Understand Ten and Ones

Use  to show ten and ones. Then write the number in different ways.

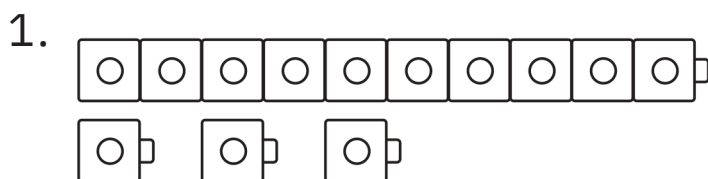


1 ten 4 ones

$$\underline{10} + \underline{4}$$

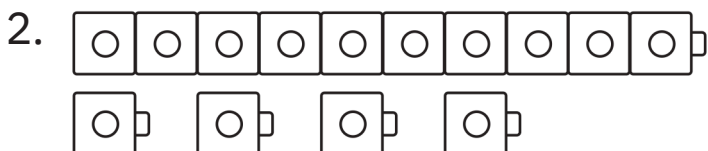
$$\underline{14}$$

Use the model. Write the number three different ways.



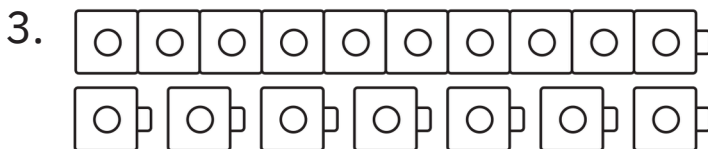
___ ten ___ ones

$$\underline{\quad} + \underline{\quad}$$



___ ten ___ ones


$$\underline{\quad} + \underline{\quad}$$

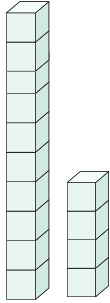


___ ten ___ ones

$$\underline{\quad} + \underline{\quad}$$

Understand Ten and Ones

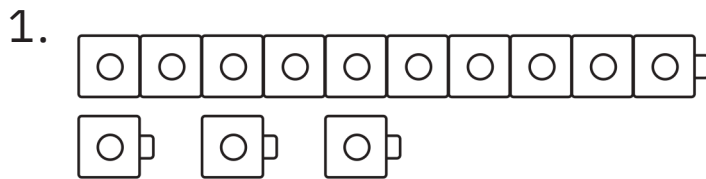
Use  to show ten and ones. Then write the number in different ways.



1 ten 4 ones

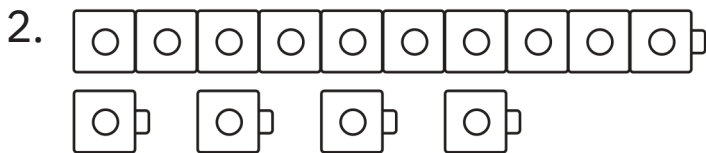
$$\begin{array}{r} \underline{10} + \underline{4} \\ \underline{14} \end{array}$$

Use the model. Write the number three different ways.



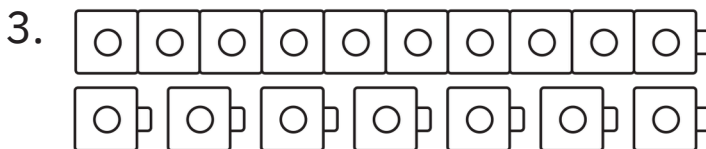
1 ten 3 ones

$$\begin{array}{r} \underline{10} + \underline{3} \\ \underline{13} \end{array}$$



1 ten 4 ones

$$\begin{array}{r} \underline{10} + \underline{4} \\ \underline{14} \end{array}$$




1 ten 7 ones

$$\begin{array}{r} \underline{10} + \underline{7} \\ \underline{17} \end{array}$$

Name _____

Draw Ten and Some More

1. Draw thirteen . Circle ten.




Write how many tens and ones. Write the number.

 1 ten 3 ones
 13

2. Draw fourteen . Circle ten.

Write how many tens and ones. Write the number.

 ten ones

3. Choose a different number from ten to nineteen. Draw that many . Circle ten.

Write how many tens and ones. Write the number.

 ten ones




Writing and Reasoning: If you have fifteen kites and you give ten away, how many will you have left? Draw to show your work. Write the numbers.

_____ tens _____ ones _____ kites

Name Answer Key

Draw Ten and Some More


1. Draw thirteen . Circle ten.



Write how many tens and ones. Write the number.


1 ten 3 ones
13

2. Draw fourteen . Circle ten.



Write how many tens and ones. Write the number.

1 ten 4 ones
14

3. Choose a different number from ten to nineteen. Draw that many . Circle ten.



Write how many tens and ones. Write the number.

1 ten 7 ones
17

**Answers
may vary**



Writing and Reasoning: If you have fifteen kites and you give ten away, how many will you have left? Draw to show your work. Write the numbers.

0 tens 5 ones 5 kites