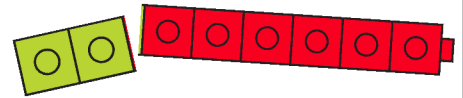


## Record Related Facts

Use the numbers to write four related facts.



$$2 + 6 = 8$$

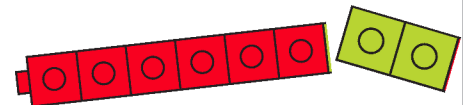


$$8 - 2 = 6$$

THINK  
Each number is  
in all four facts.



$$6 + 2 = 8$$



$$8 - 6 = 2$$

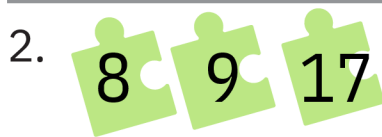


$$6 + 7 = 13$$

$$\square - 6 = 7$$

$$6 + \square = 13$$

$$13 - 7 = \square$$



$$8 + 9 = 17$$

$$\square - 8 = 9$$

$$9 + \square = 17$$

$$17 - 9 = \square$$




$$5 + 7 = 12$$

$$\square - 7 = 5$$

$$7 + \square = 12$$

$$12 - 5 = \square$$



$$5 + 9 = 14$$

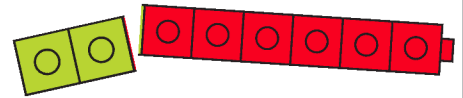
$$\square - 5 = 9$$

$$9 + \square = 14$$

$$14 - 9 = \square$$

# Record Related Facts

Use the numbers to write four related facts.



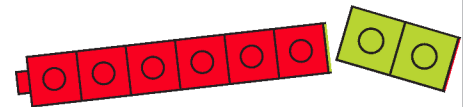
$$2 + 6 = 8$$

$$8 - 2 = 6$$

THINK  
Each number is  
in all four facts.



$$6 + 2 = 8$$



$$8 - 6 = 2$$



$$6 + 7 = 13$$

$$\boxed{13} - 6 = 7$$

$$6 + \boxed{7} = 13$$

$$13 - 7 = \boxed{6}$$



$$8 + 9 = 17$$

$$\boxed{17} - 8 = 9$$

$$9 + \boxed{8} = 17$$

$$17 - 9 = \boxed{8}$$



$$5 + 7 = 12$$

$$\boxed{12} - 7 = 5$$

$$7 + \boxed{5} = 12$$

$$12 - 5 = \boxed{7}$$



$$5 + 9 = 14$$

$$\boxed{14} - 5 = 9$$

$$9 + \boxed{5} = 14$$


$$14 - 9 = \boxed{5}$$

Name \_\_\_\_\_

# Addition and Subtraction Facts

Write a number sentence to match the picture. Then write a related fact.

1.



_____	○	_____	○	_____
_____	○	_____	○	_____

2.




_____	○	_____	○	_____
_____	○	_____	○	_____

3.



_____	○	_____	○	_____
_____	○	_____	○	_____

4.



_____	○	_____	○	_____
_____	○	_____	○	_____







## Writing and Reasoning Draw a picture.

Color some objects one color and the rest a different color. Write 3 related facts about your objects.

# Addition and Subtraction Facts

Write a number sentence to match the picture. Then write a related fact.

1.		$\begin{array}{r} 4 \\ \hline \end{array} + \begin{array}{r} 8 \\ \hline \end{array} = \begin{array}{r} 12 \\ \hline \end{array}$ $\begin{array}{r} 12 \\ \hline \end{array} - \begin{array}{r} 8 \\ \hline \end{array} = \begin{array}{r} 4 \\ \hline \end{array}$	Answers may vary slightly
2.		$\begin{array}{r} 4 \\ \hline \end{array} + \begin{array}{r} 6 \\ \hline \end{array} = \begin{array}{r} 10 \\ \hline \end{array}$ $\begin{array}{r} 10 \\ \hline \end{array} - \begin{array}{r} 4 \\ \hline \end{array} = \begin{array}{r} 6 \\ \hline \end{array}$	
3.		$\begin{array}{r} 7 \\ \hline \end{array} + \begin{array}{r} 5 \\ \hline \end{array} = \begin{array}{r} 12 \\ \hline \end{array}$ $\begin{array}{r} 12 \\ \hline \end{array} - \begin{array}{r} 7 \\ \hline \end{array} = \begin{array}{r} 5 \\ \hline \end{array}$	
4.		$\begin{array}{r} 5 \\ \hline \end{array} + \begin{array}{r} 4 \\ \hline \end{array} = \begin{array}{r} 9 \\ \hline \end{array}$ $\begin{array}{r} 9 \\ \hline \end{array} - \begin{array}{r} 5 \\ \hline \end{array} = \begin{array}{r} 4 \\ \hline \end{array}$	



## Writing and Reasoning Draw a picture.

Color some objects one color and the rest a different color. Write 3 related facts about your objects.

Accept all legible answers