






USE PICTURES AND SUBTRACTION TO COMPARE.

Subtract to compare groups.



$$\underline{4} - \underline{3} = \underline{1}$$

There is one **more**  than there are .

There is one **fewer**  than there are .

Subtract to Compare.



$$5 - 3 = \underline{\quad}$$

_____more .



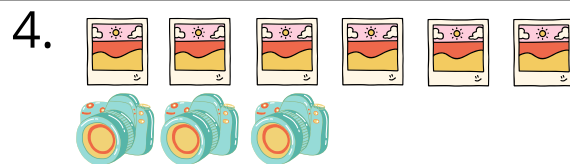
$$6 - 4 = \underline{\quad}$$

_____fewer .



$$7 - 4 = \underline{\quad}$$

_____more .




$$6 - 3 = \underline{\quad}$$



_____fewer .



USE PICTURES AND SUBTRACTION TO COMPARE.

Subtract to compare groups.



$$\underline{4} - \underline{3} = \underline{1}$$

There is one **more**  than there are .

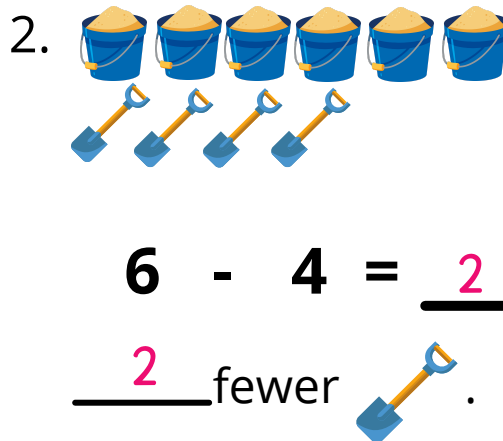
There is one **fewer**  than there are .

Subtract to Compare.



$$5 - 3 = \underline{2}$$

2 more .



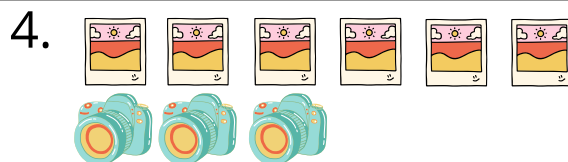
$$6 - 4 = \underline{2}$$

2 fewer .



$$7 - 4 = \underline{3}$$

3 more .



$$6 - 3 = \underline{3}$$




3 fewer .

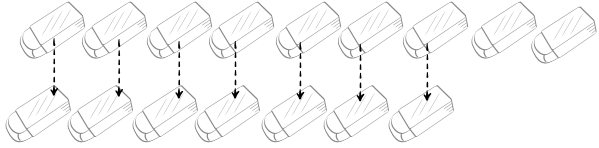
Name _____

Date _____


SOLVE THE STORY PROBLEMS





Draw a picture to compare. Complete the subtraction sentences to solve.

1. Tim has 9  .
Sara has 2 fewer  .
How many  does Sara have?






— ○ — ○ —

Sara has _____  .

2. Pam has 8  .
Mike has 1  .
Tell who has more  .
How many more  ?

— ○ — ○ —

_____ has _____ more  .

3. Joe has 3  .
Jane has 2  .
Tell who has fewer  .
How many fewer?

— ○ — ○ —

_____ has _____ fewer  .




Joe and Sara have 10  . Pam and Jane have 8  . Explain how to compare who has more and who has fewer.

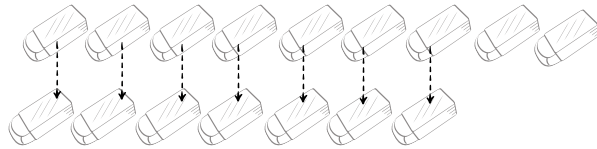
Name **Answer Key**

Date

SOLVE THE STORY PROBLEMS





Draw a picture to compare. Complete the subtraction sentences to solve.

1. Tim has 9 .
Sara has 2 fewer .
How many  does Sara have?






$$\underline{9} - \underline{2} = \underline{7}$$

Sara has 7 .

2. Pam has 8 .
Mike has 1 .
Tell who has more .
How many more ?

$$\underline{8} - \underline{1} = \underline{7}$$

Pam has 7 more .

3. Joe has 3 .
Jane has 2 .
Tell who has fewer .
How many fewer?

$$\underline{3} - \underline{2} = \underline{1}$$

Jane has 1 fewer .

Joe and Sara have 10 . Pam and Jane have 8 . Explain how to compare who has more and who has fewer.

Answers may vary. Accept all legible answers.