
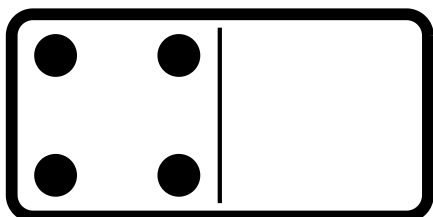


Name \_\_\_\_\_

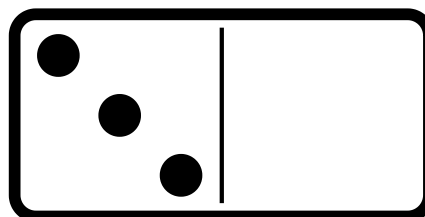
Date \_\_\_\_\_

## ALGEBRA - ADD ZERO

Use  to show each number.  
Add then write the sum.



$$4 + 0 = \underline{4}$$

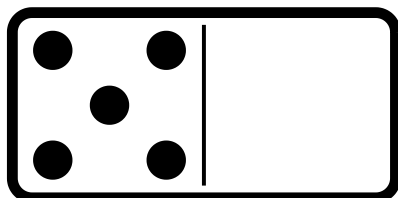


$$3 + 0 = \underline{3}$$

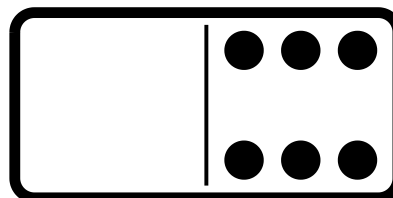
When you add zero to a number, the number remains the same. The sum is that same number.

Use  to show each number.  
Add then write the sum.

1.

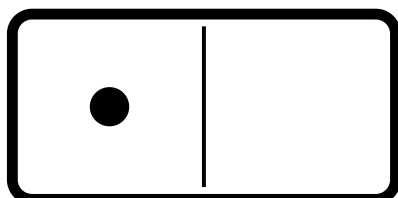


$$5 + 0 = \underline{\quad}$$

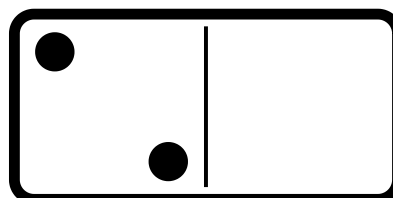


$$0 + 6 = \underline{\quad}$$

2.



$$1 + 0 = \underline{\quad}$$




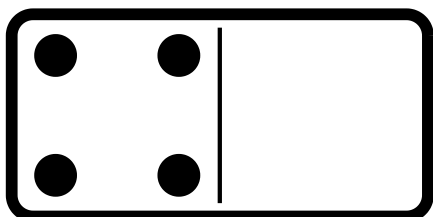
$$2 + 0 = \underline{\quad}$$

Name **Answer Key**

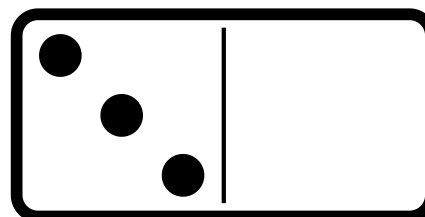
Date \_\_\_\_\_

## ALGEBRA - ADD ZERO

Use  to show each number.  
Add then write the sum.



$$4 + 0 = \underline{4}$$

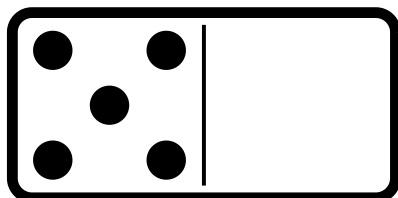


$$3 + 0 = \underline{3}$$

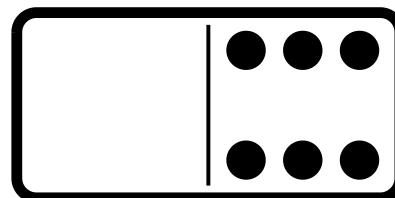
When you add zero to a number, the number remains the same. The sum is that same number.

Use  to show each number.  
Add then write the sum.

1.

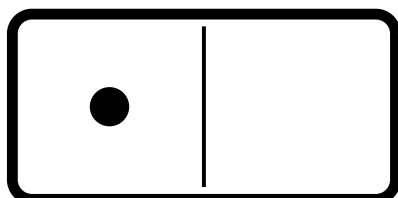


$$5 + 0 = \underline{5}$$

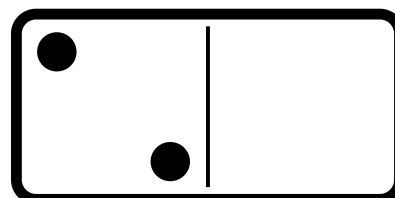


$$0 + 6 = \underline{6}$$

2.



$$1 + 0 = \underline{1}$$



$$2 + 0 = \underline{2}$$

Name \_\_\_\_\_

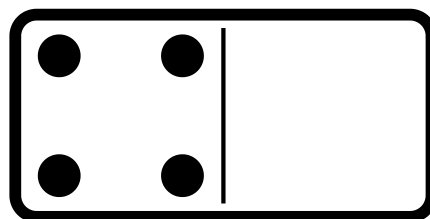
Date \_\_\_\_\_

# ALGEBRA - ADD ZERO

Use the following pictures to complete the addition sentences.

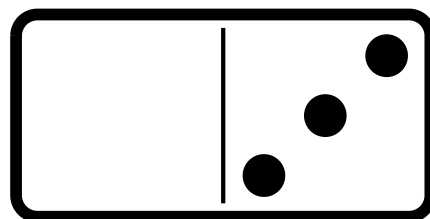
1.

$$\underline{4} + \underline{0} = \underline{4}$$



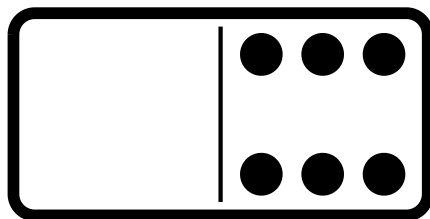
2.

$$\underline{\quad} + \underline{\quad} = \underline{\quad}$$



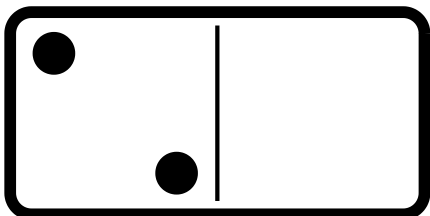
3.

$$\underline{\quad} + \underline{\quad} = \underline{\quad}$$



4.

$$\underline{\quad} + \underline{\quad} = \underline{\quad}$$



Name **Answer Key**

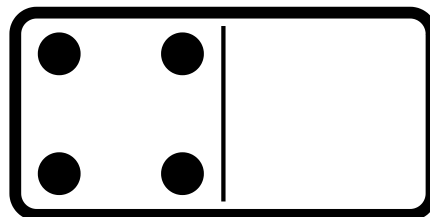
Date \_\_\_\_\_

**ALGEBRA - ADD ZERO**

Use the following pictures to complete the addition sentences.

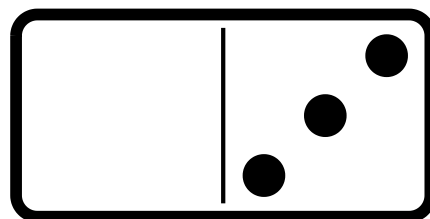
1.

$$\underline{4} + \underline{0} = \underline{4}$$



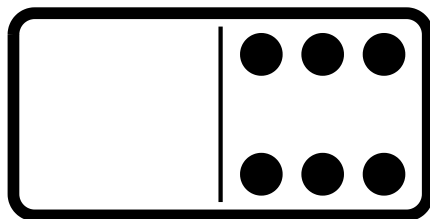
2.

$$\underline{0} + \underline{3} = \underline{3}$$



3.

$$\underline{0} + \underline{6} = \underline{6}$$



4.

$$\underline{2} + \underline{0} = \underline{2}$$

