

Name _____

Teacher _____

Class _____


Date _____

ALGEBRA - USE PICTURES TO ADD



3 frogs

and




2 more frogs

5

frogs


Draw circles around the animals added to the group.
Write how many.

1.



4 fish

and



3 more fish

____ fish

2.



2 cats


and



2 more cats


____ cats

3.



5 dogs

and



3 more dogs

____ dogs

Name _____

Teacher _____

Class _____

Date _____

DRAW TO ADD

1.

5 bees

and

3 more bees

8

bees

2.

3 fish

and

1 more fish

____ fish

3.

6 cats

and

2 more cats

____ cats



Writing: Explain how your drawing shows adding to in Exercise 3.

