


Name _____

Date _____

MODEL ADDING TO




3 frogs

3

and

+



2 more frogs

2

=

5

Use or draw to show adding to. Write the sum.

1. 4 fish and 2 more fish




4

+

2

=

2. 2 cats and 2 more cats



2

+

2

=

3. 5 butterflies and 1 more butterfly



5

+

1



=

Name: _____



Date: _____



MAKE GROUPS TO ADD



Choose two pictures. Draw a line to add them. Then write the sum.



10














**Writing: Change 3 to 5 in exercise b.
How does that change your sum?**



Name: Answer key

Date

MODEL ADDING TO

		
		
3 frogs	and	2 more frogs
3	+	2 = <u>5</u>

Use  or draw  to show adding to. Write the sum.

1. 4 fish and 2 more fish



$$4 + 2 = \underline{6}$$

2. 2 cats and 2 more cats



$$2 + 2 = \underline{4}$$

3. 5 butterflies and 1 more butterfly











$$5 + 1 = \underline{6}$$

Name: Answer Key

Date:


MAKE GROUPS TO ADD

Choose two pictures. Draw a line to add them. Then write the sum.

a.			<u>10</u>
b.			<u> </u>
c.			<u> </u>
d.			<u> </u>



**Writing: Change 3 to 5 in exercise b.
How does that change your sum?**



Answers may vary. Accept all legible answers