

Name \_\_\_\_\_


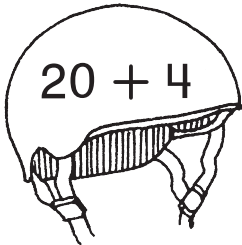
# Name the Number

Each helmet has a number.


Use 2 digits to write the number in the bicycle.

Then write each number another way.


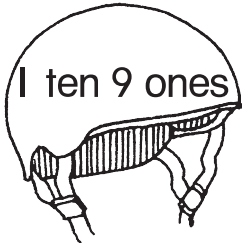
1.




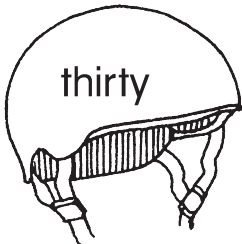

2.




3.




4.





## Writing and Reasoning

How did you choose another way to write the number in Exercise 2?

---



---



---