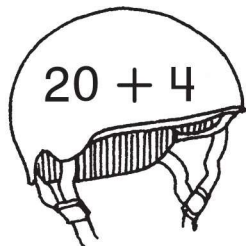


Name the Number

Each helmet has a number.


Use 2 digits to write the number in the bicycle. Then write each number another way.

1.




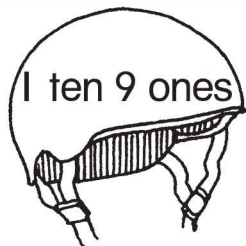
Twenty four
2 tens 4 ones

2.




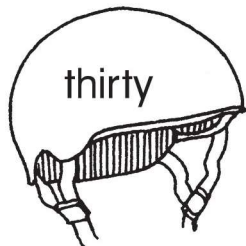
80 + 5
8 tens 5 ones

3.



nineteen
10 + 9

4.



Thirty
3 tens 0 ones

Writing and Reasoning How did you choose another way to write the number in Exercise 2? **Accept reasonable answers**

Name

Enrich
Lesson 1.5