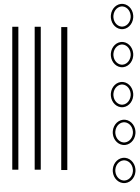


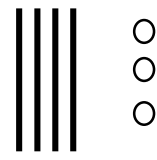
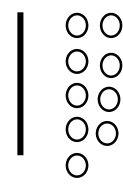


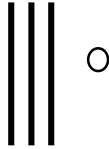
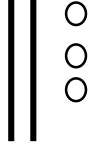
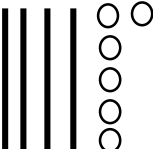

Name: _____

Date: _____

Expanding Numbers

Write the number. Describe it in another way. Then draw a quick picture to show the number.

1.	<u>35</u>	<u>3</u> tens <u>5</u> ones <u>30</u> + <u>5</u>	
2.	<u>74</u>	<u>7</u> tens <u>4</u> ones <u>70</u> + <u>4</u>	
3.	<u>62</u>	<u>6</u> tens <u>2</u> ones <u>60</u> + <u>2</u>	
4.	<u>43</u>	<u>4</u> tens <u>3</u> ones <u>40</u> + <u>3</u>	
5.	<u>19</u>	<u>1</u> tens <u>9</u> ones <u>10</u> + <u>9</u>	

6.	<u>31</u>	<u> 3 </u> tens <u> 1 </u> ones <u> 30 </u> + <u> 1 </u>	
7.	<u>23</u>	<u> 2 </u> tens <u> 3 </u> ones <u> 20 </u> + <u> 3 </u>	
8.	<u>46</u>	<u> 4 </u> tens <u> 6 </u> ones <u> 40 </u> + <u> 6 </u>	
9.	<u>87</u>	<u> 8 </u> tens <u> 7 </u> ones <u> 80 </u> + <u> 7 </u>	
10.	<u>17</u>	<u> 1 </u> tens <u> 7 </u> ones <u> 10 </u> + <u> 7 </u>	